







Naam: \_\_\_\_\_






# BETALEN EN TERUGGEVEN

1. Betaal gepast. Kleur het juiste bedrag.

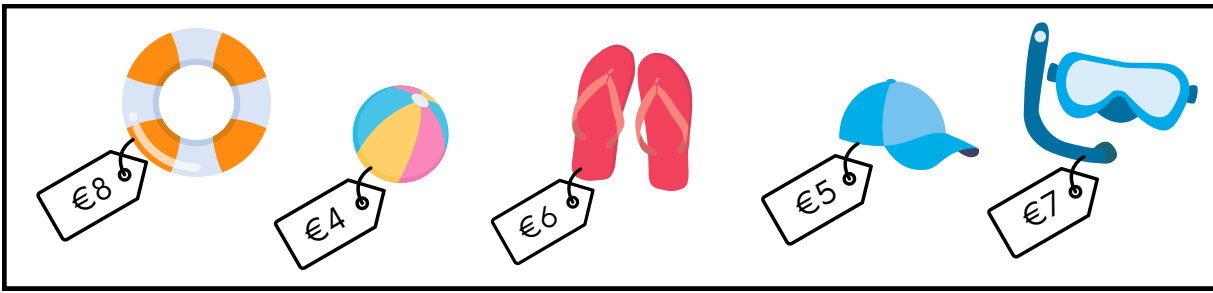
 15 cent	<p>5 cent 5 cent 5 cent 5 cent    10 cent 10 cent    20 cent</p> <p>€ 1 € 1 € 1 € 1    € 2 € 2 € 2 € 2</p> <p>5 euro 5 euro 5 euro    10 euro 20 euro</p>
 €15	<p>5 cent 5 cent 5 cent 5 cent    10 cent 10 cent    20 cent</p> <p>€ 1 € 1 € 1 € 1    € 2 € 2 € 2 € 2</p> <p>5 euro 5 euro 5 euro    10 euro 20 euro</p>
 12 euro 10 cent	<p>5 cent 5 cent 5 cent 5 cent    10 cent 10 cent    20 cent</p> <p>€ 1 € 1 € 1 € 1    € 2 € 2 € 2 € 2</p> <p>5 euro 5 euro 5 euro    10 euro 20 euro</p>
 8 euro 15 cent	<p>5 cent 5 cent 5 cent 5 cent    10 cent 10 cent    20 cent</p> <p>€ 1 € 1 € 1 € 1    € 2 € 2 € 2 € 2</p> <p>5 euro 5 euro 5 euro    10 euro 20 euro</p>
 €2 20 cent	<p>5 cent 5 cent 5 cent 5 cent    10 cent 10 cent    20 cent</p> <p>€ 1 € 1 € 1 € 1    € 2 € 2 € 2 € 2</p> <p>5 euro 5 euro 5 euro    10 euro 20 euro</p>

## 2. Hoeveel kost het? Reken uit en kleur het juiste bedrag.





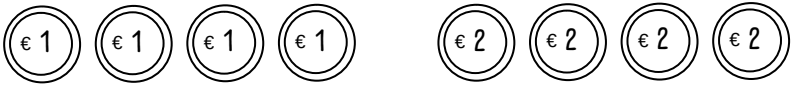
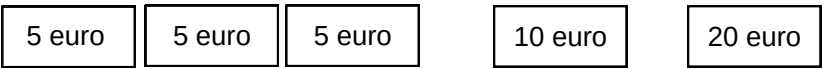



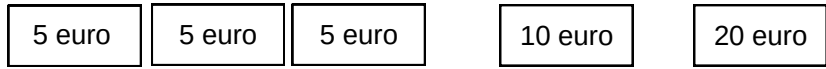


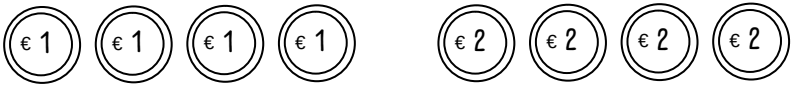




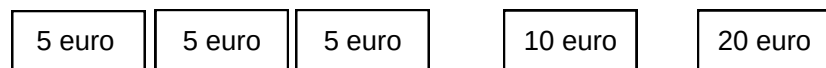

 <p>€..... + €..... = €.....</p>	<p>5 cent 5 cent 5 cent 5 cent      10 cent 10 cent      20 cent</p> <p>€1 €1 €1 €1      €2 €2 €2 €2</p> <p>5 euro    5 euro    5 euro      10 euro      20 euro</p>
 <p>€..... + €..... = €.....</p>	<p>5 cent 5 cent 5 cent 5 cent      10 cent 10 cent      20 cent</p> <p>€1 €1 €1 €1      €2 €2 €2 €2</p> <p>5 euro    5 euro    5 euro      10 euro      20 euro</p>
 <p>€..... + €..... = €.....</p>	<p>5 cent 5 cent 5 cent 5 cent      10 cent 10 cent      20 cent</p> <p>€1 €1 €1 €1      €2 €2 €2 €2</p> <p>5 euro    5 euro    5 euro      10 euro      20 euro</p>
 <p>€..... + €..... = €.....</p>	<p>5 cent 5 cent 5 cent 5 cent      10 cent 10 cent      20 cent</p> <p>€1 €1 €1 €1      €2 €2 €2 €2</p> <p>5 euro    5 euro    5 euro      10 euro      20 euro</p>
 <p>€..... + €..... = €.....</p>	<p>5 cent 5 cent 5 cent 5 cent      10 cent 10 cent      20 cent</p> <p>€1 €1 €1 €1      €2 €2 €2 €2</p> <p>5 euro    5 euro    5 euro      10 euro      20 euro</p>

### 3. Je betaalt te veel. Hoeveel krijg je terug? Kleur het juiste bedrag.



Ik heb eerst ... euro en ik koop voor .... euro.

Ik krijg ... euro terug.

 <p>€..... - €..... = €.....</p>	  
 <p>€..... - €..... = €.....</p>	  
 <p>€..... - €..... = €.....</p>	  
 <p>€..... - €..... = €.....</p>	  
 <p>€..... - €..... = €.....</p>	